

Lecture 10

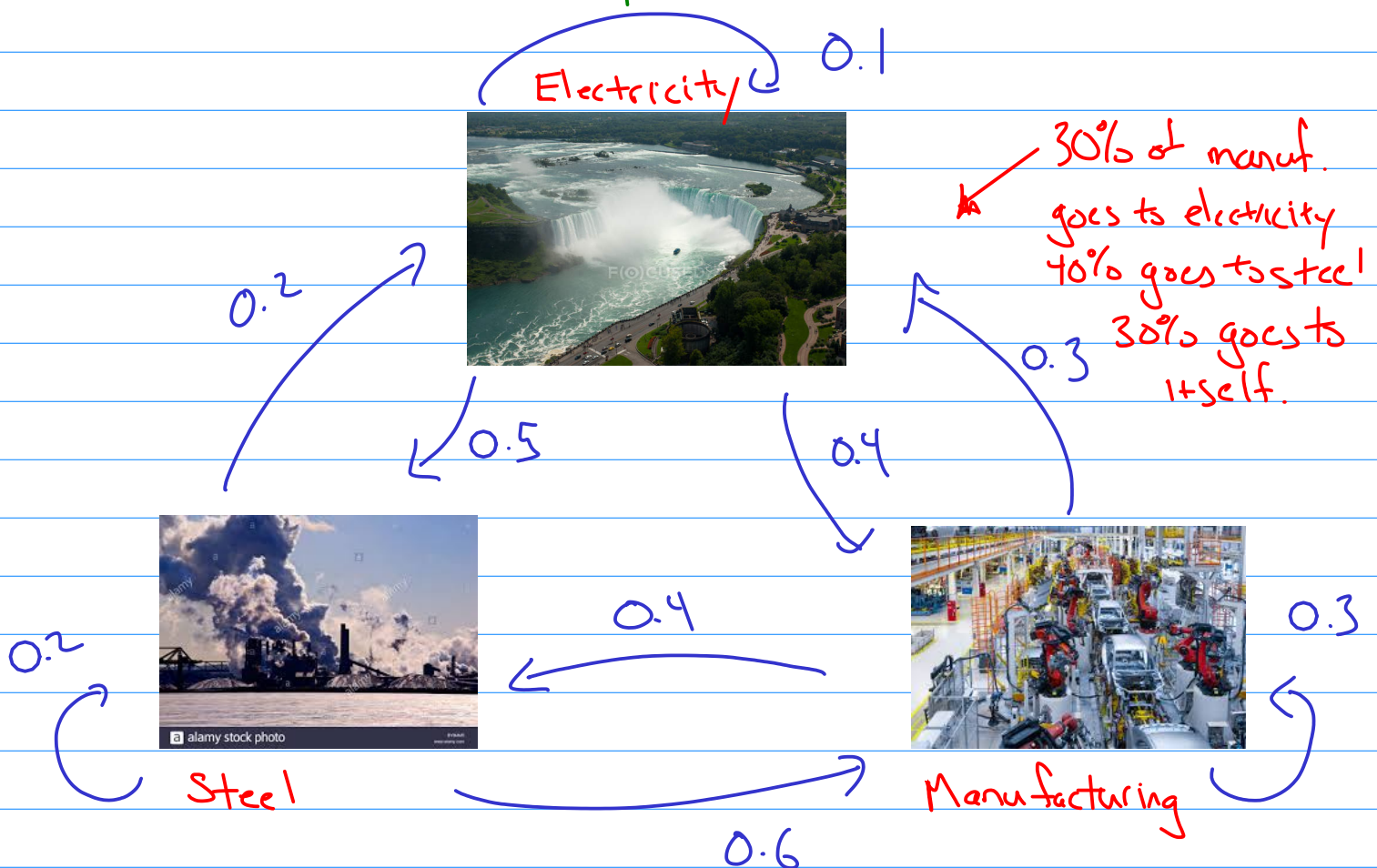
Applications of linear systems (Section 1.6)

Today's lecture: two applications of SLE (economics & network flows)

I. Homogeneous Systems in Economics (Input-Output Model)

Setup Divide a nation's economy into many sections: manufacturing, communications, entertainment, and so on. Assume for each sector, we know

- ① its total output
- ② how this output is divided into other sectors



Defⁿ The total dollar value of a sector's output is the called the price of that output

Fact (Leontief - Nobel Prize Winner) There exists equilibrium prices that can be assigned to the outputs such that the income of each sector balances its expenses.

Ex (use linear alg to find equilibrium)

Manuf.	Elect.	Steel	(Purchased by)
0.3	0.4	0.6	Manuf.
0.3	0.1	0.2	Elect.
0.4	0.5	0.2	Steel

Let p_M = price of manufacturing (total annual output)
 p_E = price of electricity
 p_S = price of steel

Each row in table gives cost. E.g. row 2 implies electricity spends

$$0.3p_m + 0.1p_E + 0.2p_s$$

Since we want cost (expenses) to equal its output (price) get

$$0.3p_m + 0.1p_E + 0.2p_s = p_E$$

Each row gives a linear equation:

$$p_m = 0.3p_m + 0.4p_E + 0.6p_s \quad -0.7p_m + 0.4p_E + 0.6p_s = 0$$

$$p_E = 0.3p_m + 0.1p_E + 0.2p_s \Rightarrow 0.3p_m - 0.9p_E + 0.2p_s = 0$$

$$p_s = 0.4p_m + 0.5p_E + 0.2p_s \quad 0.4p_m + 0.5p_E - 0.8p_s = 0$$

homog SLE

$$\begin{bmatrix} -0.7 & 0.4 & 0.6 \\ 0.3 & -0.9 & 0.2 \\ 0.4 & 0.5 & -0.8 \end{bmatrix} \sim \begin{bmatrix} 1 & 0 & -1.21569 \\ 0 & 1 & -0.62745 \\ 0 & 0 & 0 \end{bmatrix}$$

p_s is free $p_E = 0.62745 p_s$ $p_m = 1.21569 p_s$

$$\text{So } p_S = \text{free} \quad p_E = 0.62745 p_S \quad p_M = 1.21569 p_S$$

$$\Rightarrow \text{all SIF's have form } \vec{p} = p_S \begin{bmatrix} 1.21569 \\ 0.62745 \\ 1 \end{bmatrix}$$

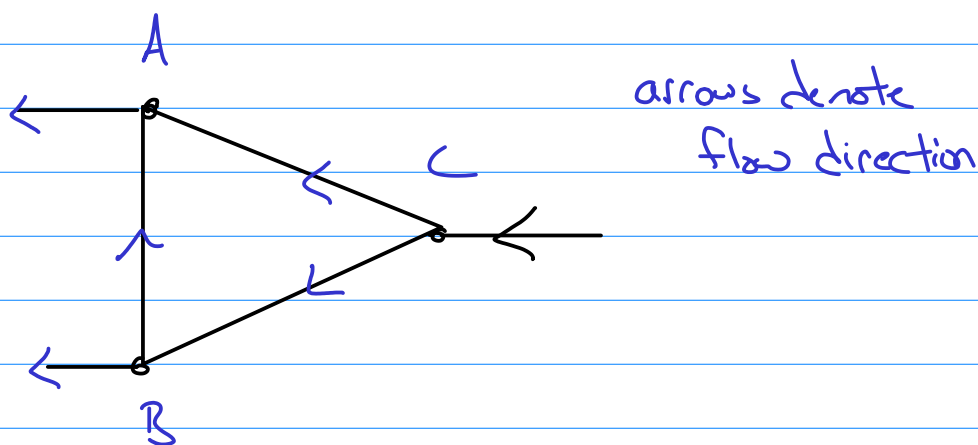
Meaning? If $p_S = \$10,000,000$, then if the output of manufacturing is \$12,156,900 and electricity is \$6,274,500,

then each sector makes exactly enough to pay off all of its costs.

II Network flows

A network consists of sets of points called junctions (or nodes) with lines or arcs called branches connecting junctions

Ex

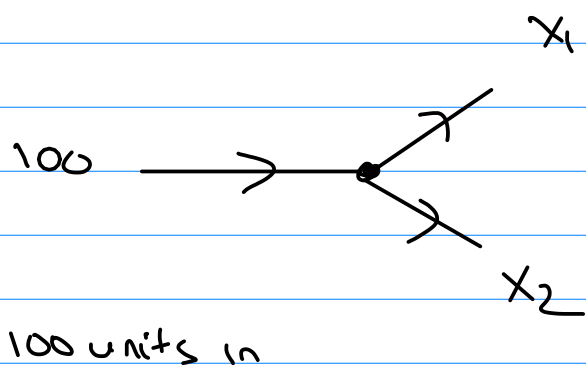


Basic assumption:

total flow into network = total flow out of a network

total flow into junction = total flow out of a junction

Ex

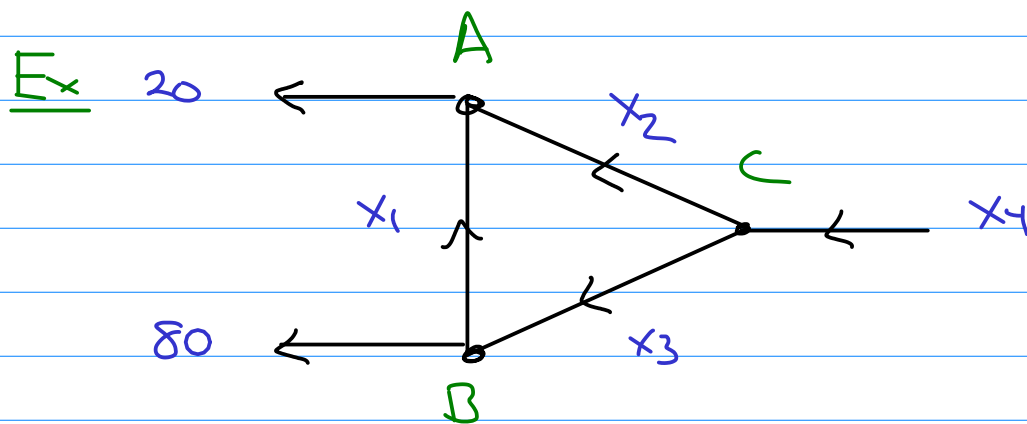


$$100 = x_1 + x_2$$

↑
into out of

a linear equation

Typical Problem: Given a network with partial information, describe the flow at each branch



Set this problem up as a SLE.

Intersection	Flow-In	Flow-Out
A	$x_1 + x_2$	20
B	x_3	$80 + x_1$
C	x_4	$x_2 + x_3$
Total network	x_4	$20 + 80 = 100$

Get a SLE:

$$\begin{array}{rcl} x_1 + x_2 & = & 20 \\ x_3 & = & x_1 + 80 \\ x_4 & = & x_2 + x_3 \\ x_4 & = & 100 \end{array} \Rightarrow \left[\begin{array}{cccc|c} 1 & 1 & 0 & 0 & 20 \\ -1 & 0 & 1 & 0 & 80 \\ 0 & -1 & -1 & 1 & 0 \\ 0 & 0 & 0 & 1 & 100 \end{array} \right]$$

row reduced echelon form:

$$\left[\begin{array}{ccccc} 1 & 0 & -1 & 0 & -80 \\ 0 & 1 & 1 & 0 & 100 \\ 0 & 0 & 0 & 1 & 100 \\ 0 & 0 & 0 & 0 & 0 \end{array} \right] \quad \leftarrow x_3 \text{ is free}$$

$$x_1 = -80 + x_3$$

$$x_2 = 100 - x_3$$

$$x_4 = 100$$

$$\text{So } \vec{x} = \begin{bmatrix} x_1 \\ x_2 \\ x_3 \\ x_4 \end{bmatrix} = \begin{bmatrix} -80 + x_3 \\ 100 - x_3 \\ x_3 \\ 100 \end{bmatrix} = x_3 \begin{bmatrix} 1 \\ -1 \\ 1 \\ 0 \end{bmatrix} + \begin{bmatrix} -80 \\ 100 \\ 0 \\ 100 \end{bmatrix}$$

Interpretation: · model depends upon x_3
· constraints from model. All directions one way
so all $x_i \geq 0$.

$$\begin{aligned} \text{Thus } \overbrace{100 - x_3}^{x_2} &\geq 0 \Rightarrow 100 \geq x_3 \\ x_1 = -80 + x_3 &\geq 0 \Rightarrow x_3 \geq 80 \end{aligned}$$

$$\text{Hence } 100 \geq x_3 \geq 80$$

Key idea: linear algebra can be useful!!

